



UPKAR'S

**STAFF SELECTION
COMMISSION**

STENOGRAPHERS
GRADE 'C' & 'D'
EXAMINATION

SOLVED PAPERS

SSC





**STAFF SELECTION
COMMISSION**

**STENOGRAPHERS
GRADE 'C' & 'D'
EXAMINATION**

SOLVED PAPERS

By
Editorial Board
Samanya Gyan Darpan

Upkar Prakashan, Agra-2

Introducing Direct Shopping

Now you can purchase from our vast range of books and magazines at your convenience :

- ▶ Pay by Credit Card/Debit Card or Net Banking facility on our website www.upkar.in OR
- ▶ Send Money Order/Demand Draft of the print price of the book favouring 'Upkar Prakashan' payable at Agra. In case you do not know the price of the book, please send Money Order/Demand Draft of ₹ 100/- and we will send the books by VPP (Cash on delivery).

(Postage charges FREE for purchases above ₹ 100/-. For orders below ₹ 100/-, ₹ 20/- will be charged extra as postage)

© Publishers

Publishers

(An ISO 9001 : 2000 Company)

UPKAR PRAKASHAN

2/11A, Swadeshi Bima Nagar, AGRA-282 002

Phone : 4053333, 2530966, 2531101

Fax : (0562) 4053330, 4031570

E-mail : care@upkar.in, Website : www.upkar.in

Branch Offices

4845, Ansari Road, Daryaganj,

New Delhi-110 002

Phone : 011-23251844/66

28, Chowdhury Lane, Shyam
Bazar, Near Metro Station,
Gate No. 4

Kolkata-700004 (W.B.)

Phone : 033-25551510

1-8-1/B, R.R. Complex (Near Sundaraiah Park,
Adjacent to Manasa Enclave Gate),

Bagh Lingampally, **Hyderabad**-500 044 (A.P.)

Phone : 040-66753330

B-33, Blunt Square,
Kanpur Taxi Stand, Mawaiya,
Lucknow-226 004 (U.P.)

Phone : 0522-4109080

Pirmohani Chowk,

Kadamkuan,

Patna-800 003

Phone. : 0612-2673340

- The publishers have taken all possible precautions in publishing this book, yet if any mistake has crept in, the publishers shall not be responsible for the same.
- This book or any part thereof may not be reproduced in any form by Photographic, Mechanical, or any other method, for any use, without written permission from the Publishers.
- Only the courts at Agra shall have the jurisdiction for any legal dispute.

ISBN : 978-93-5013-502-0

Price : ₹ 85.00

(Rs. Eighty Five Only)

Code No. 1842

Printed at : UPKAR PRAKASHAN (Printing Unit) Bye-pass, AGRA

Contents

- SSC Stenographers Grade 'C' & 'D' Exam., 14-09-14
(First Shift) Solved Paper..... 1–20
 - SSC Stenographers Grade 'C' & 'D' Exam., 14-09-14
(Second Shift) Solved Paper..... 1–20
 - SSC Stenographers Grade 'C' & 'D' Exam., 29-12-13
(First Shift) Solved Paper..... 1–20
 - SSC Stenographers Grade 'C' & 'D' Exam., 29-12-13
(Second Shift) Solved Paper..... 1–20
 - SSC Stenographers Grade 'C' & 'D' Exam., 29-07-12
Solved Paper..... 1–20
 - SSC Stenographers Grade 'C' & 'D' Exam., 16-10-11
Solved Paper..... 1–20
 - SSC Stenographers Grade 'C' & 'D' Exam., 09-01-2011 (2010)
Solved Paper..... 1–20
-

S. S. C.
Stenographers
Grade 'C' & 'D' Exam.
(Ist shift)
Solved Paper

2014

(Held on 14 September, 2014)

General Intelligence & Reasoning

Directions—(Q. 1–6) Select the related letter / word / number from the given alternatives.

- 8 : 81 :: 64 : ?
(A) 525 (B) 125
(C) 250 (D) 625
- ABCD : ZYXW :: EFGH : ?
(A) PONM (B) XYZW
(C) TSRQ (D) VUTS
- Bee : Hive :: Dog : ?
(A) Nest (B) Kennel
(C) Coop (D) Stable
- BDEG : MOPR :: ? : oqrt
(A) Dfgi (B) DFGI
(C) dfgi (D) dFgi
- ELJH : MTRP :: UBZX : ?
(A) DJIG (B) CJHF
(C) CIGE (D) CBYA
- Star : Constellation :: Soldier : ?
(A) Regiment (B) War
(C) Bravery (D) School

Directions—(Q. 7–12) Find the odd word/ letters/number pair from the given alternatives.

- (A) 1131 (B) 125
(C) 343 (D) 729
- (A) Diamond (B) Topaz
(C) Ruby (D) Pearl
- (A) 45 (B) 63
(C) 108 (D) 56
- (A) BDEF (B) QSTU
(C) IKLM (D) GHJK
- (A) NOL (B) DEB
(C) RTP (D) HIF

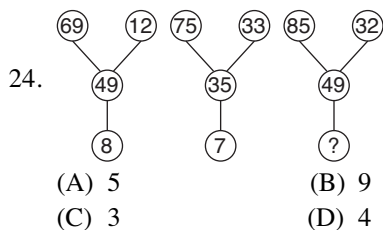
- (A) Mandolin (B) Guitar
(C) Drums (D) Violin
- Which word comes last in the dictionary ?
bonanza, beautiful, balance, bottle
(A) bottle (B) bonanza
(C) beautiful (D) balance
- Which word comes third in the dictionary ?
seize, season, secret, seed
(A) seed (B) seize
(C) season (D) secret

Directions—(Q. 15–17) A series is given with one term missing. Choose the correct alternative from the given ones that will complete the series.

- AFC, BHD, CJE, ?
(A) DLH (B) DLF
(C) DHF (D) DLJ
- ZTO, YSN, XRM, ?
(A) WTL (B) WPL
(C) BHM (D) WQL
- 6, 12, 20, 30, 42, ?
(A) 46 (B) 48
(C) 56 (D) 50
- SELECTION is coded as 856539742
SESSION is coded as :
(A) 8397428 (B) 8688472
(C) 8588742 (D) 8588427
- Which one of the given responses can be added to all the given letters to make meaningful words ?
SL
PR.....
TR.....
BR.....
S.....
(A) _out (B) _een
(C) _eep (D) _ick

20. Sushma scored more than Deepak. Rushil scored as much as Ansh. Samhita scored less than Vasavi. Deepak scored more than Rushil. Vasavi scored less than Ansh. Who scored the lowest ?
 (A) Vasavi (B) Samhita
 (C) Deepak (D) Ansh
21. TOOLS is written as STOOL and WORDS is written as :
 (A) SROWD (B) ROWDS
 (C) SWORD (D) WORSD
22. In a house there are eight 40 watt bulbs which are burning for 5 hrs a day and four 80 watt bulbs burning for 10 hrs a day. If electricity costs ₹ 2 per kilowatt per hour, what is the monthly bill ?
 (A) ₹ 328 (B) ₹ 216
 (C) ₹ 268 (D) ₹ 288
23. Identify the wrong number in the given series.
 21, 45, 72, 36, 12, 54, 27
 (A) 27 (B) 45
 (C) 36 (D) 12

Directions—(Q. 24–26) Select the missing number from the given alternatives.



25.

7	9	4
6	8	?
8	2	8
336	144	192

- (A) 4 (B) 5
 (C) 6 (D) 7

26.

7	3	3
3	5	8
6	9	?
126	135	168

- (A) 9 (B) 8
 (C) 7 (D) 6

27. If '×' stands for '+', '÷' stands for '×', '-' stands for '+' and '+' for '-' which of the following is correct ?
 (A) $40 \div 8 + 10 \times 5 - 8 = 47$
 (B) $40 \times 8 \div 10 + 5 - 8 = 123$
 (C) $40 \div 8 - 10 \times 5 + 8 = 314$
 (D) $40 \div 8 - 10 \times 5 + 8 = -35$
28. In a row of houses, the house with a terrace is 25th from left end and 4th from the right end. How many houses are there in the row ?
 (A) 29 (B) 26
 (C) 27 (D) 28
29. Kunal starts journey straight towards east by car. After going 75 km, he turns his car to the left and goes 25 km straight. Again he turns to the left, goes a distance of 40 km straight, again he turns to the left and moves a distance of 25 km. How far is he from the starting point ?
 (A) 150 km (B) 35 km
 (C) 25 km (D) 50 km
30. 6 persons are playing a card game. Suresh is facing Raghubir who is left of Ajay and to the right of Pramod, Ajay is to the left of Dhiraj. Yogendra is to be left of Pramod. If Dhiraj exchanges his seat with Yogendra and Pramod with Raghubir, who will be sitting to the left of Dhiraj ?
 (A) Ajay (B) Yogendra
 (C) Raghubir (D) Suresh
31. Raju travels 8 km to the north, turns left and travels 4 kms and then again turns right and covers another 5 kms. Then he turns to right and travels for 4 kms. How far is he from the starting point ?
 (A) 21 km (B) 9 km
 (C) 13 km (D) 17 km
32. Solve the equation using the below given values and answer in numeric values.
 $\square = 10 \quad \diamond = 6 \quad \Delta = 15 \quad \circ = 3 \quad \square = 9$
 $(\Delta + \square) \div \circ$
 (A) 10 (B) 6
 (C) 12 (D) 8

Directions—(Q. 33 and 34) One or two statements are given followed by two Conclusions I and II. You have to consider the statements to be

true, even if it seems to be at variance from commonly known facts. You are to decide which of the given conclusions can definitely be drawn from the given statements. Indicate your answer.

33. **Statements :**

- All snakes are fishes.
- All crocodiles are snakes.

Conclusions :

- (I) All crocodiles are fishes.
- (II) All snakes are crocodiles.
- (A) Neither conclusion (I) nor (II) follow
- (B) Only conclusion (I) follows
- (C) Only conclusion (II) follows
- (D) Both conclusions (I) and (II) follow

34. **Statements :**

- (I) Maya runs faster than Swati.
- (II) Lily runs faster than Maya.
- (III) Swati runs faster than Lily.

If first two statements are true then third statement is :

- (A) Vague
- (B) True
- (C) False
- (D) Uncertain

Directions—(Q. 35–36) You are given the address of a town followed by four alternatives. Of these, only one matches while the others have some mistakes. You have to choose exactly the same as the given one as your answer.

35. Ms. Aruna Devi,
418/3 New Housing Colony,
Raipur Road,
Dehradun 248 001

- (A) Ms. Aruna Devi,
418/3 New Housing Colony,
Rajpur Road,
Dehradun 248 001
- (B) Ms. Aruna Devi,
418/3 New Housing Colony,
Rajpur Road,
Dehradun 248 101
- (C) Miss. Aruna Devi,
418/3 New Housing Colony,
Rajpur Road,
Dehradun 248 001

(D) Ms. Aruna Devi,
418/3 New Housing Colony,
Rajpur Road,
Dehradun 248 001

36. Mrs. J Sympson
Braun & Braun Co. Ltd.
12, Kenneth Apartments
Vasant Vihar,
New Delhi - 110020

(A) Mrs. J Sympson
Braun & Braun Co. Ltd.
12, Kenneth Apartment
Vasant Vihar
New Delhi - 110002

(B) Mrs. J. Sympson
Bruan & Bruan Co. Ltd.
12, Kenneth Apartments
Vasant Vihar,
New Delhi - 110020

(C) Mrs. J Sympson
Braun & Braun Co. Ltd.
12, Keneth Apartments
Vasant Vihar,
New Delhi.

(D) Mrs. J Sympson
Braun & Braun Co. Ltd.
12, Kenneth Apartments
Vasant Vihar,
New Delhi - 110020

Directions—(Q. 37 and 38) Answer the questions. Below are given some Roll Numbers of candidates registered at different centres for an examination. The first two digits from the left stand for the centre code and the next four for the serial number of the candidates registered at the centre.

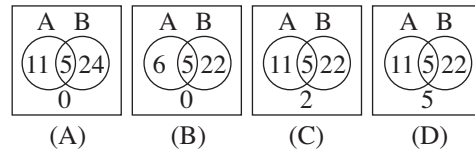
061391 041631 031863 069234
024268 046198 059721 011432
051491 010028 020063 046523
011432 050451 029378 040028

37. In which centre does the serial number 9234 occur ?

- (A) 05
- (B) 02
- (C) 06
- (D) 01

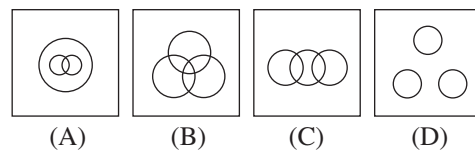
38. How many candidates belong to centre 04 ?
 (A) 2 (B) 4
 (C) 3 (D) 6
39. Suppose you are a team leader and some discussion arose.
 (A) You believe in over all participation
 (B) You listen to other point of view
 (C) You consider your ideas are supreme
 (D) You would be reluctant to accept the views of others
40. When some one directly criticises your behaviour, how will you behave ?
 (A) Ready to close up and stop listening
 (B) Become upset about it
 (C) Carefully listen to their opinion
 (D) Think of ways to change your behaviour
41. You are asked to attend a social function at your friends' house.
 (A) You cannot spend time for this kind of function
 (B) You accept just to please your friend
 (C) You are not willing because you dislike such gathering
 (D) You may attend the function to maintain the relationship
42. Either he is educated or he is left out.
 (A) He is not educated and he is not left out
 (B) He is not left out
 (C) He is not educated
 (D) He is not educated and he is left out
43. When you feel tensions rising between you and your employer ?
 (A) React to harsh criticism in an emotional manner
 (B) Lash out at him your uncontrolled temper
 (C) Keep a cool conduct
 (D) Be afraid to disagree with your employer
44. Out of 40 students, 16 go to Kannada and 27 to English classes. If 5 students overlap, select the Venn diagram which shows :
- No. of students who neither attend Kannada or English classes
 - No. of students who attend only English or only Kannada classes.

A = Kannada classes
 B = English classes



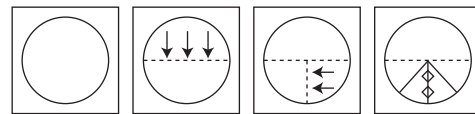
45. Select the Venn diagram that correctly shows the relationship :

Coffee : Sugar : Tea

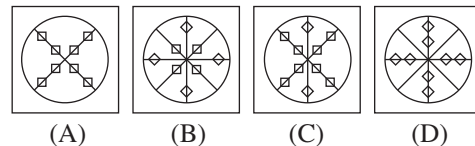


46. A piece of paper is folded and cut as shown below in the question figures. From the given answer figures, indicate how it will appear when opened.

Question figures

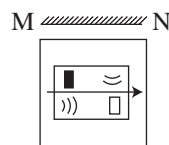


Answer figures

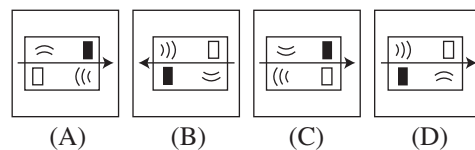


47. If a mirror is placed on the line MN, then which of the answer figure is the right image of the given figure ?

Question figure

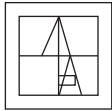


Answer figures




48. Which answer figure will complete the question figure ?

Question figure



Answer figures



(A) (B) (C) (D)

49. A word is represented by only one set of numbers as given in any one of the alternatives. The sets of numbers given in the alternatives are represented by two classes of alphabets as in the 2 matrices given below. The columns and rows of Matrix I are numbered from 0 to 4 and that of Matrix II from 5 to 9. A letter from these matrices can be represented first by its row and next by column number. For example, A can be represented by 12, 24 etc. R can be represented by 57, 76 etc. Identify the set for the given words : 'EAST'

MATRIX-I

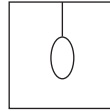
	0	1	2	3	4
0	A	E	S	T	H
1	T	H	A	E	S
2	E	S	T	H	A
3	H	A	E	S	T
4	S	T	H	A	E

MATRIX-II

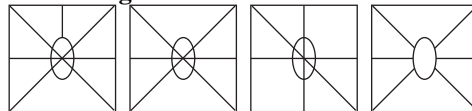
	5	6	7	8	9
5	P	O	R	K	L
6	K	L	P	O	R
7	O	R	K	L	P
8	L	P	O	R	K
9	R	K	L	P	O

- (A) 44, 32, 21, 03 (B) 32, 31, 02, 04
 (C) 20, 43, 33, 11 (D) 13, 12, 14, 10
50. From the given answer figures, select the one in which the question figure is hidden/embedded.

Question figure



Answer figures



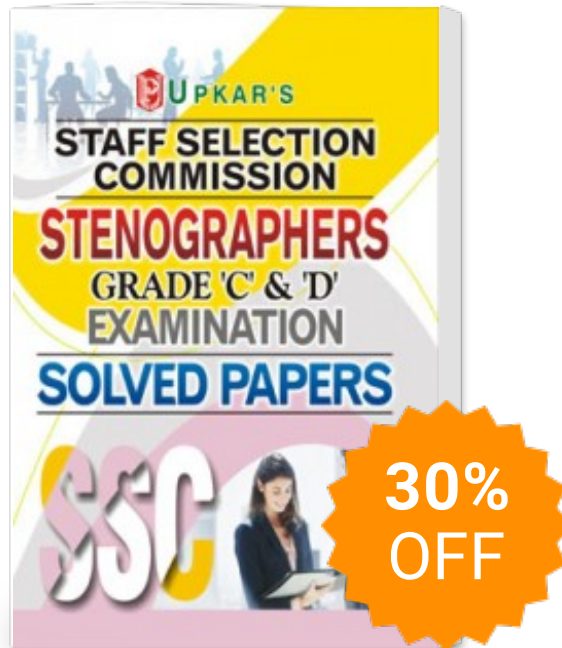
(A) (B) (C) (D)

For Visually Handicapped Candidates only

Directions—(Q. 44 and 45) Select the related letter/word/ number from the given alternatives.

44. Plant : Botany : : ?
 (A) Fossils : Chemistry
 (B) Liver : Cardiology
 (C) Cell : Cytology
 (D) Heart : Psychology
45. 81 : 27 : : 93 : ?
 (A) 13 (B) 39
 (C) 63 (D) 31
46. If Ram is the son of the brother of the father of Shyam then Ram is Shyam's—
 (A) Nephew (B) Uncle
 (C) Cousin (D) None of the above
47. From the given alternative words, select the word which cannot be formed using the letters of the given word—
 PROFESSIONALISM
 (A) SENSATION (B) MISSION
 (C) LESSON (D) SESSION
48. Find the odd number from the given alternatives.
 (A) 6, 36, 216 (B) 5, 25, 125
 (C) 4, 16, 128 (D) 3, 9, 27
49. Find the wrong number in the given series—
 216, 343, 516, 729, 1000
 (A) 343 (B) 216
 (C) 729 (D) 516
50. Choose the correct alternative from the given ones that will complete the series.
 0, 2, 6, 12, 20, 30, ?
 (A) 35 (B) 42
 (C) 40 (D) 37

SSC Stenographers Grade C & D Examination Solved Papers



Publisher : **Upkar Prakashan**

ISBN : 9789350135020

Author : Editorial Board
Samanya Gyan Darpan

Type the URL : <http://www.kopykitab.com/product/5008>



Get this eBook